

Happy Tuesday Year One! 😊

As always, it is not necessary to print out all of these slides so please read them through carefully so you can decide exactly which are needed as a paper copy.

Thank you.

Session 2

OMS: Number bonds to 20 rap

2

I'm a number bond hero, 20 and 0

Work to be done, 19 and 1

I'm ready. Are you? 18 and 2

Time for tea? 17 and 3

Someone's at the door, 16 and 4

Go for a drive, 15 and 5

Magic tricks, 14 and 6

Going to Devon, 13 and 7

It's getting late, 12 and 8


Feeling fine, 11 and 9

Let's start again, 10 and 10

WALT: Multiply using arrays

$$6 \times 2 = \underline{\quad}$$

3



$$7 \times 5 = \underline{\quad}$$




WALT: Multiply using arrays (I have done an example below and your cards are on the following slides)

*Choose one blue card and one white card.


*Write down the multiplication sum.

*Draw the matching array.

*Write your answer.



$$5 \times 3 = 15$$



(Remember to choose the slide for your Maths group.)


WALT: Multiply using arrays

*Choose one blue card and one white card.






*Write down the multiplication sum.

*Draw the matching array.

*Write your answer.



6




WALT: Multiply using arrays

*Choose one blue card and one white card.




*Write down the multiplication sum.

*Draw the matching array.

*Write your answer.



7








WALT: Multiply using arrays

*Choose one blue card and one white card.

*Write down the multiplication sum.

*Draw the matching array.

*Write your answer.



Plenary:

Hit the button – Choose a times table-2, 5 or 10

<https://www.topmarks.co.uk/maths-games/hit-the-button>